



Count the amount of each of the different objects.


1)



2)



3)




4)



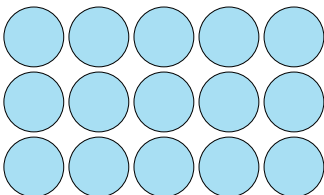
5)



6)



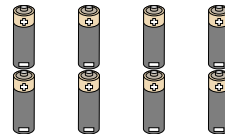
7)



8)



9)



Answers

1. _____

2. _____

3. _____

4. _____

5. _____

6. _____

7. _____

8. _____

9. _____



Count the amount of each of the different objects.


1)



2)




3)




4)



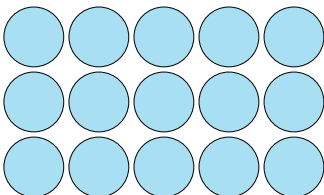
5)



6)



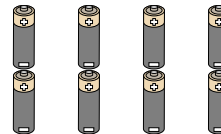
7)



8)



9)



Answers

1. 12

2. 19

3. 2

4. 9

5. 14

6. 20

7. 15

8. 20

9. 8